



Through School To Nation

CHANGKAT CHANGI SECONDARY SCHOOL

ART & DESIGN

TERM 1 WEEK 3

BASIC PHOTOSHOP

NAME: _____ () CLASS: _____ DATE: _____

Section A: Photoshop Function

Read the questions carefully. Write down the answers in the spaces provided below.

1) Identifying: Name this software.



2) Defining: What is Photoshop?

3) Identifying: Name the tools as seen below?
























3) Identifying: Fill in the keyboard shortcuts and where to find them below:

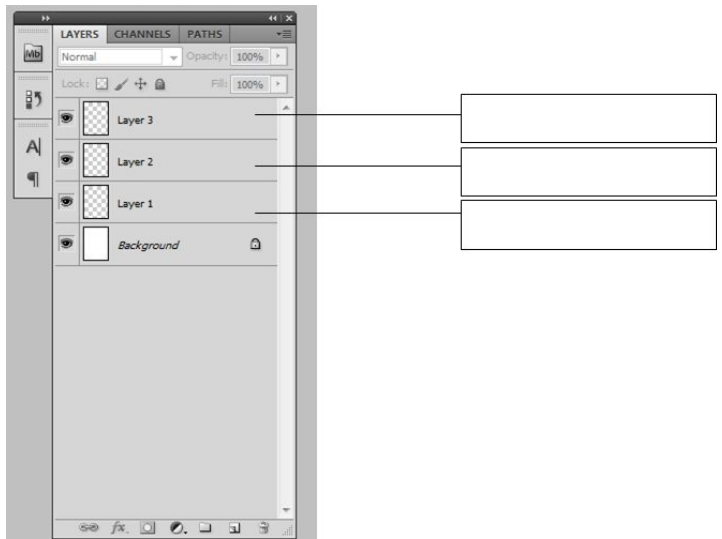
	Tool	Keyboard Shortcut	Where to find it?
a)	<i>Move</i>	V	<i>Tools panel</i>
b)	Path Selection		
c)	Eyedropper		
e)	Pen tool		
f)	List of history		
e)	Save/Load path selection		
f)	Inverse selection		
g)	Zoom in & Zoom out		
h)	Deselect		
i)	Undo		
j)	Save		

4) Defining: What are Layers?



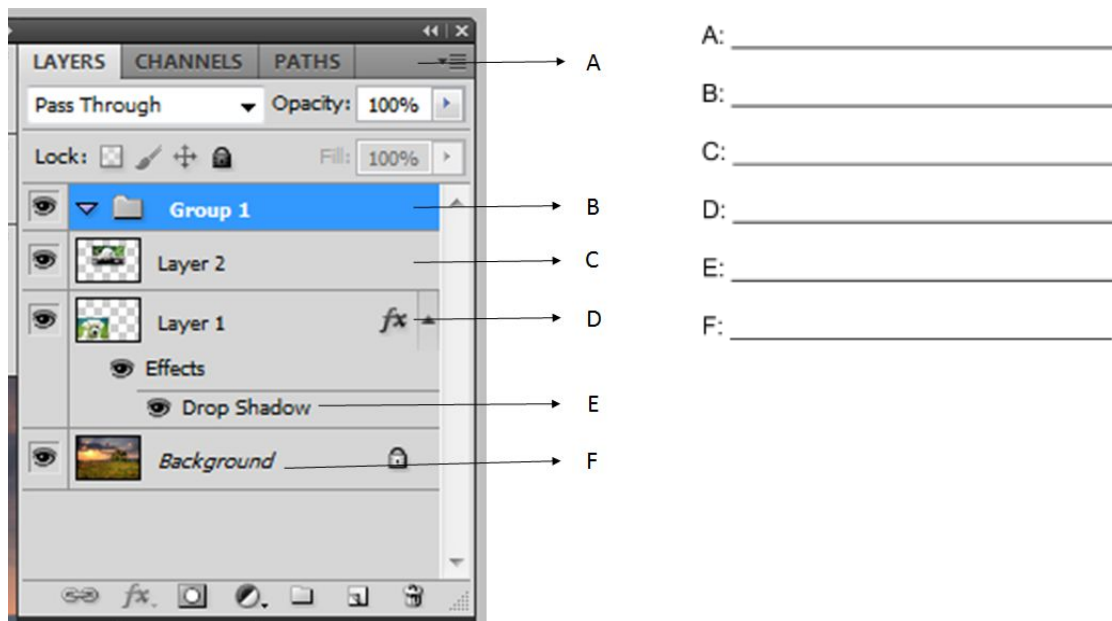
5) Understanding: Why are Layers important?

6) Identifying: Name the positions of the layers accordingly with these helping words based on the diagram provided
[Di.1] Foreground, Middleground, Background



[Di. 1]

7) Identifying & Applying: Study the diagram below [Di. 2] and name the icons accordingly.



[Di. 2]

- A: _____
- B: _____
- C: _____
- D: _____
- E: _____
- F: _____

